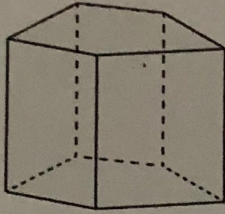
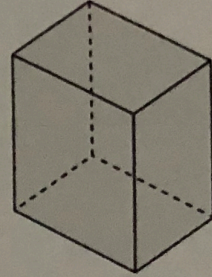


# Qui sont les polyèdres ?

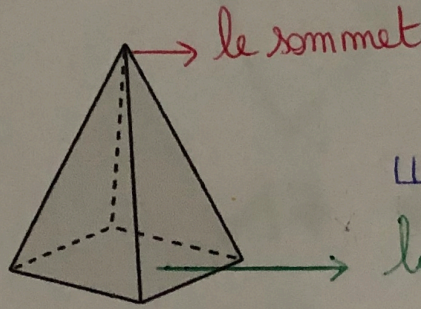
## Les polyèdres



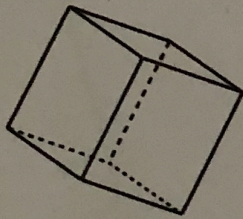
Un prisme droit



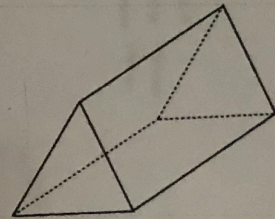
Un pavé droit



Une pyramide




Un cube

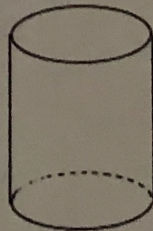


Un prisme droit

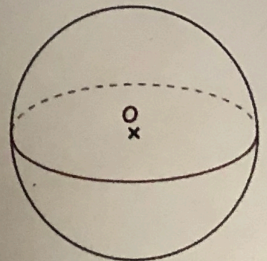
## Les NON polyèdres



Un cône de révolution



Un cylindre de révolution



Une sphère  
Une boule

